



This workshop must be printed and developed as a requirement for the presentation of the quarterly test.

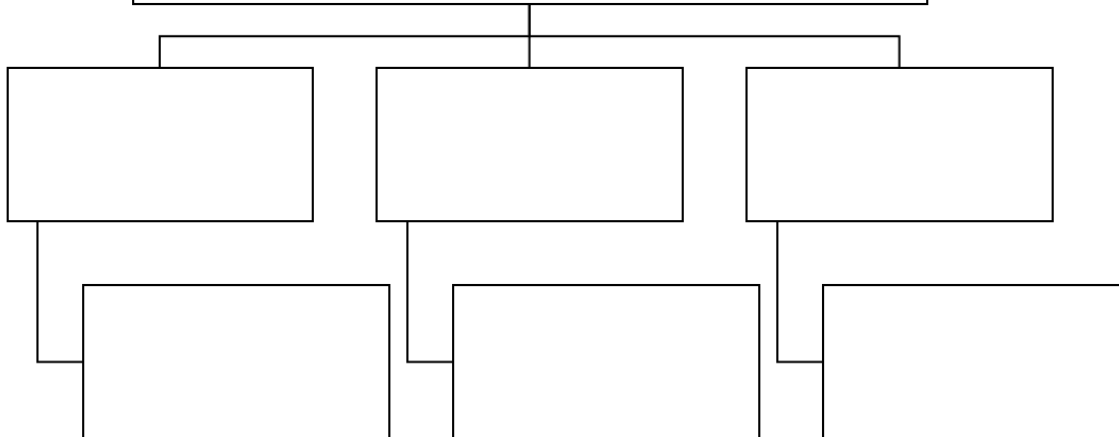
Delivery date: April 1st

Complete the sentences and the conceptual maps.

1. Living beings are divided into three large groups: _____,

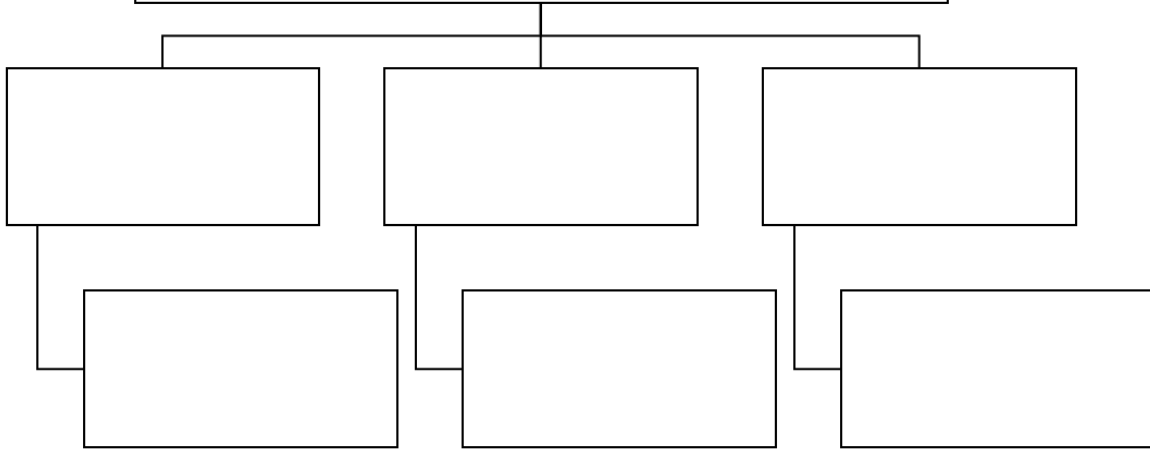
_____.

2. Living beings



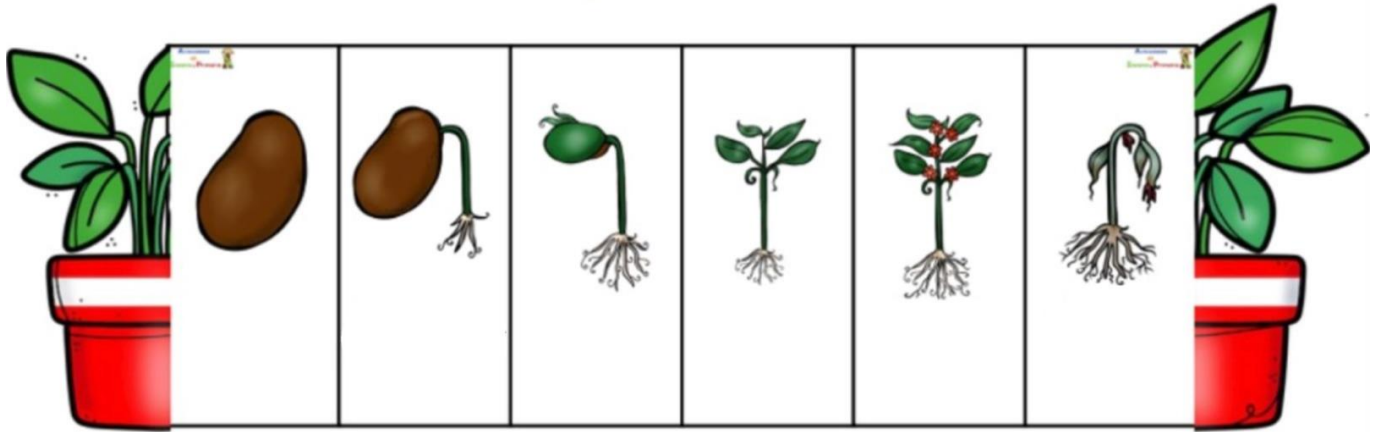
3. The vital functions are: _____, _____ and _____.

4. Vital functions



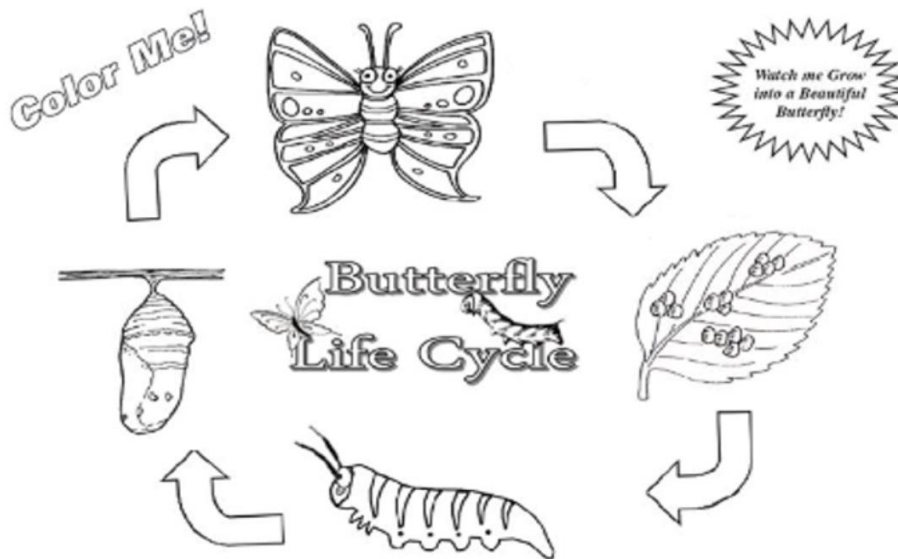
5. The vital function that allows living beings to give rise to other living beings of the same species is called _____.
6. The vital function that allows living beings to obtain the energy and nutrients necessary to live is _____. To do it we need _____, _____ and _____.
7. First you have a little _____, next the seed grows a _____, next you have a _____, next you have a full grown _____ with leaves and _____.
(Remember the song)
8. Write the word according to the image.

The life cycle of a plant



9. In the butterfly life cycle are four stages that are _____, _____, _____ and _____.
10. How many stages are in the life cycle of a butterfly? _____.
11. Write in the image the stages in the life cycle of a butterfly


Butterfly Life Cycle



The life cycle of a fish

Most fishes have five stages in their life cycle. The stages in the life cycle will go in the following order eggs, larva, fry or alevin, juvenile fish and adult fish.

12. Write in the image the stages in the life cycle of a fish.



13. How many stages are in the life cycle of a fish? _____

14. Where live the fish? _____

Human life cycle

First, a baby is born. After a few months, the baby learns how to crawl, and then becomes a toddler. Next, the toddler grows into a child. After a few years, the child grows into a teenager. Then the teenager grows into an adult. As time goes on the adult gets older and becomes elderly.

15. How many stages are in the human life cycle? _____

16. What are stages of human life cycle? _____, _____, _____, _____ and _____.

17. Color, cut and order the images in the boxes listed with their names.

Name _____

Human Life Cycle ~ Girl

First, a baby girl is born. After a few months, the baby learns how to crawl, and then becomes a toddler. Next, the toddler grows into a child. After a few years, the child grows into a teenager. Then, the teenager grows into an adult woman. As time goes on, the woman gets older and becomes elderly.

1	2	3	4	5	6
---	---	---	---	---	---

Copyright © Erin Hanson

